




FRANSALIAN SCHOOL OF EXCELLENCE

HOLIDAY HOME WORK



2026-2027



Name : _____

Class 3 Div : _____

Roll no : _____



Instructions for Students.

- **Prepare for upcoming Periodic Test -1.**
- **Read story book to improve spoken English.**
- **Learn Tables from (1 to 15).**
- **Practice cursive writing daily.**
- **Colour the pictures where ever necessary.**
- **Do the holiday homework neatly and submit it on reopening day of the school on 10th June 2026.**

ENGLISH

Look at the Picture and write 10 lines - At the Park



Articles

A

The article 'A' is used before a word which begins with a consonant.

AN

The article 'An' is used before a word which begins with a vowel.

THE

The article 'The' is used before the name of a person, place or thing.

Fill in the blanks with an appropriate article:

- | | | |
|----------------|---------------------|-------------------|
| 1. _____ book | 2. _____ car | 3. _____ igloo |
| 4. _____ apple | 5. _____ table | 6. _____ dog |
| 7. _____ Bible | 8. _____ Yamuna | 9. _____ umbrella |
| 10. _____ owl | 11. _____ cockroach | 12. _____ hat |
| 13. _____ sun | 14. _____ house | 15. _____ ear |

Fill in the blanks with a, an or the :

1. I bought _____ new dress.
2. Ram helped _____ old man in crossing _____ road.
3. _____ Taj Mahal is situated in Agra.
4. I saw _____ dolphin show yesterday.
5. _____ planets revolve round _____ sun.
6. Today _____ farmer will buy _____ ox and _____ cow.
7. Ali is _____ doctor.
8. _____ Ganga is _____ holy river.
9. Dont let your children play in _____ rain.
10. Ravi is _____ honest man.

MATHS



Skip Counting Practice

Identify the skip counting pattern to fill in the missing numbers.

- ① 2, 4, 6, _____, _____, _____, _____, _____, _____
- ② 0, 3, 6, _____, _____, _____, _____, _____, _____
- ③ 4, 8, 12, _____, _____, _____, _____, _____, _____
- ④ 5, 10, 15, _____, _____, _____, _____, _____, _____
- ⑤ 12, 15, 18, _____, _____, _____, _____, _____, _____
- ⑥ 0, 10, 20, _____, _____, _____, _____, _____, _____
- ⑦ 22, 24, 26, _____, _____, _____, _____, _____, _____
- ⑧ 25, 30, 35, _____, _____, _____, _____, _____, _____
- ⑨ 24, 28, 32, _____, _____, _____, _____, _____, _____
- ⑩ 12, 14, 16, _____, _____, _____, _____, _____, _____



Solve the story sums below:

If Themba has R5 less than Lucy, and Lucy has R17 - How much does Themba have?

Pravin has R50 and Siphos has R47 - How much money do they have together?

Lucy gets R52 change from her R100. How much did she spend?

Can you fill in the missing numbers to make the sums correct?



$79 + \text{----} = 91$

$\text{----} + 5 = 31$

$\text{----} + 34 = 71$

$47 + \text{----} = 58$

$\text{----} + 38 = 99$

$3 + 12 = \text{----}$

$\text{----} + 16 = 84$

$\text{----} + 11 = 71$

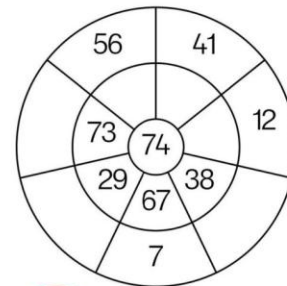
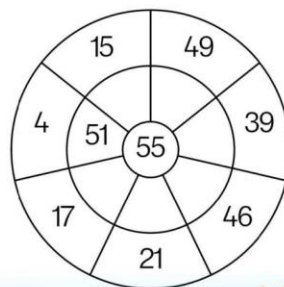
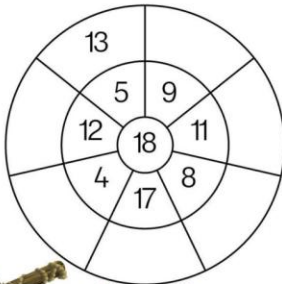
$4 + \text{----} = 85$

$5 + 67 = \text{----}$

$78 + \text{----} = 99$

$50 + 41 = \text{----}$

Fill in the missing numbers to add up to the middle number.



SCIENCE

Q. 1) Write **L** for living thing and **NL** for non living thing.

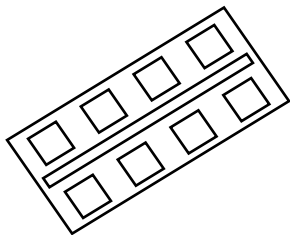



1.----- 2.----- 3.----- 4.----- 5.----- 6.-----

Q.2 Solve and find 6 sources of water

Q	U	L	P	L
M	N	A	S	T
P	F	K	E	X
O	C	E	A	N
N	H	R	X	I
D	Z	N	Y	A
R	I	N	E	R

Q.3 Name the forms of water.





Q4- Complete the table-

S.No.	System	Parts of the System	Work done by the System
1.	Skeletal System		
2.	Muscular System		
3.	Digestive System		
4.	Respiratory System		
5.	Circulatory System		
6.	Nervous System		

Q5. Stick the leaves of various plants.


HINDI

1. स्वर और व्यंजन (Vowels & Consonants)


नीचे दिए गए शब्दों में से स्वर और व्यंजन अलग-अलग लिखो

कमल, आम, गगन, ईख, फल

स्वर



व्यंजन



2. सही शब्द चुनो (Choose the correct word)

(क) _____ (फल / फुल) मीठा होता है।

(ख) _____ (घर / घार) में हम रहते हैं।

(ग) _____ (जल / जाल) पीना जरूरी है।

3. चित्र देखकर वाक्य बनाओ (Make sentences)

(क) स्कूल - _____

(ख) पेड़ - _____

(ग) पानी - _____



MARATHI

प्रश्न.१) दिलेले अंक शब्दात लिहा.

५१-	७१-
६६-	६३-
७०-	५९-
७५-	६०-
६२-	७४-

प्रश्न.२) जोडया जुळवा.

५२-	-	सत्तर
६६-	-	बासष्ट
७०-	-	बाव्वन्न
७५-	-	सहासष्ट
६२-	-	पंच्याहत्तर

प्रश्न. ३. जोडाक्षरी शब्द ओळखा व लिहा.

- १) अन्न-
- २) उन्हाळा-
- ३) प्रकाश-
- ४) जिव्हाळा-

प्रश्न - 4 दिलेले व्यंजन योग्य चित्राला जोडा . (Join the Vyanjan to right picture)

प



त



म



र



ध



प्रश्न - 5 दिलेले व्यंजनाच्या आधी येणारे व्यंजन लिहा . (Write the before Vyanjan)

----- द

----- र

----- न

----- म

----- फ

प	थ	भ	य	ध
---	---	---	---	---

SOCIAL STUDIES



Ordering The Planets

1



Mars

It is the hottest planet.

2



Uranus

It is the biggest planet.
It has a red spot.

3



Neptune

It has one moon. It is our
home.

4



Saturn

It is the Rocky Red
Planet. It has two moons


5



Mercury

It is the farthest planet
from the sun.

6



Jupiter

It is the smallest planet.
It has no moons.

7



Earth

It is the coldest planet.

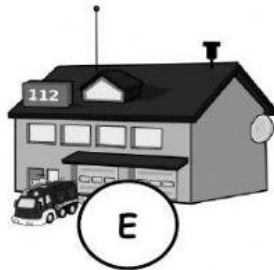
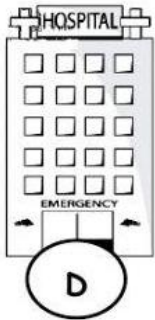
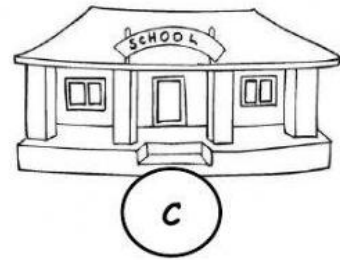
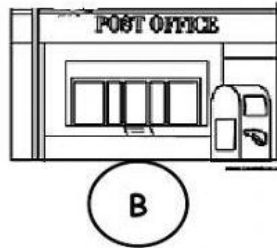
8



Venus

It has bright rings.

Places in town. Drag the letter to the corresponding sentence.



1. We go to this place when we are sick. _____
2. Mother goes to this place to buy fresh fruits and vegetables. _____
3. Fire Fighters who help put out the fire are found in this place. _____
4. I want to learn how to read and count numbers. _____
5. We go to this place to hear the word of God. _____
6. Letters are mailed in this place. _____
7. We can find Police Officers in this place. They help keep the community a safe place to live in. _____

Cut, classify and paste the drawings in the corresponding type of pollution they belong to.

Air Pollution		Water Pollution	
Volcanic Eruptions	Fires	Petroleum	Fertilizers
Smog	Industries	Garbage	Plastic
	Smoke	Sewage	

